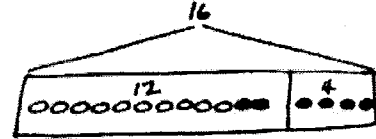


Name _____

Date _____

Read the word problem.Draw a tape diagram and label.Write a number sentence and a statement that matches the story.

1. Fatima has 12 colored pencils in her bag. She has 6 regular pencils, too. How many pencils does Fatima have?

Fatima has _____ pencils.

2. Julio swam 7 laps in the morning. In the afternoon, he swam some more laps. He swam a total of 14 laps. How many laps did he swim in the afternoon?

Julio swam _____ laps in the afternoon.

3. Peter built 18 models. He built 13 airplanes and some cars. How many car models did he build?

Peter built _____ car models.

4. Kiana found some shells at the beach. She gave 8 shells to her brother. Now, she has 9 shells left. How many shells did Kiana find at the beach?

Kiana found _____ shells.

Name _____

Date _____

Use the tape diagrams to write a variety of word problems. Use the word bank if needed. Remember to label your model after you write the story.

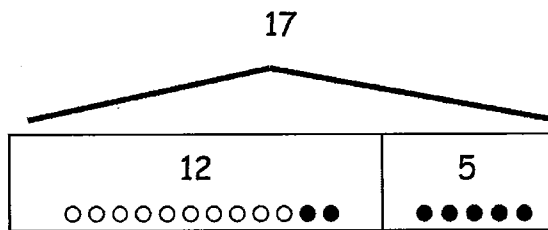
Topics (Nouns)

flowers goldfish lizards
 stickers rockets cars
 frogs crackers marbles

Actions (Verbs)

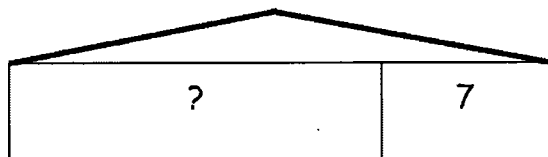
hide eat go away
 give draw get
 collect build play

1.



2.

16

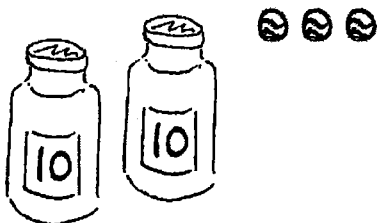


Name _____

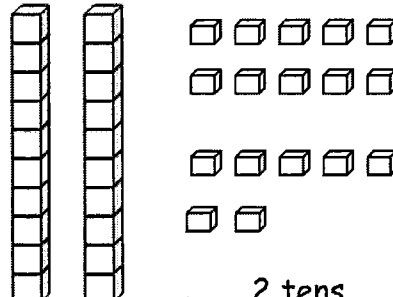
Date _____

1. Fill in the blanks, and match the pairs that show the same amount.

a.

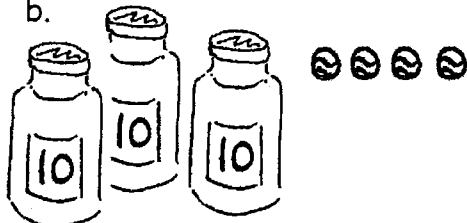


_____ tens _____ ones

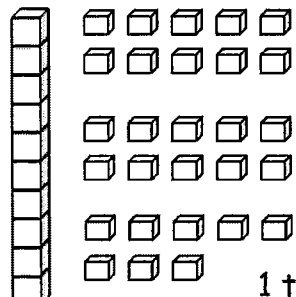


2 tens _____ ones

b.

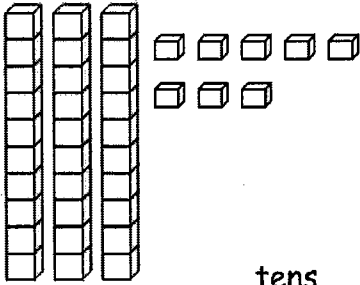


_____ tens _____ ones

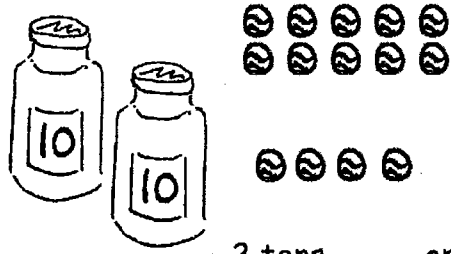


1 ten _____ ones

c.

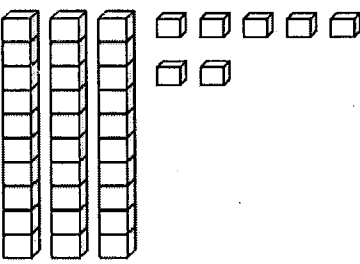


_____ tens _____ ones

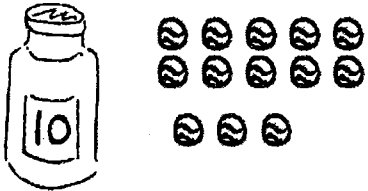


2 tens _____ ones

d.



_____ tens _____ ones



1 ten _____ ones

2. Match the place value charts that show the same amount.

a.

tens	ones
2	18

tens	ones
3	8

b.

tens	ones
1	16

tens	ones
2	1

c.

tens	ones
0	21

tens	ones
2	6

3. Check each sentence that is true.

a. 35 is the same as 1 ten 25 ones.

b. 28 is the same as 1 ten 18 ones.

c. 36 is the same as 2 tens 16 ones.

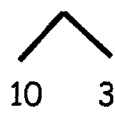
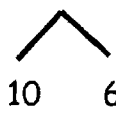
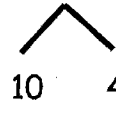
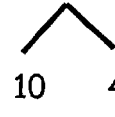
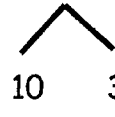

d. 39 is the same as 2 tens 29 ones.

4. Emi says that 37 is the same as 1 ten 27 ones, and Ben says that 37 is the same as 2 tens 7 ones. Draw quick tens to show if Emi or Ben is correct.

Name _____

Date _____

1. Solve using number bonds. Write the two number sentences that show that you added the ten first. Draw quick tens and ones if that helps you.

<p>a.</p> $13 + 16 = \underline{\quad}$  $16 + 10 = 26$ $26 + 3 = 29$	<p>b.</p> $16 + 23 = \underline{\quad}$  $23 + 10 = \underline{\quad}$ $\underline{\quad} + 6 = \underline{\quad}$
<p>c.</p> $16 + 14 = \underline{\quad}$  $16 + 10 = \underline{\quad}$ $\underline{\quad} + 4 = \underline{\quad}$	<p>d.</p> $14 + 26 = \underline{\quad}$  $26 + 10 = \underline{\quad}$ $\underline{\quad} + \underline{\quad} = \underline{\quad}$
<p>e.</p> $17 + 13 = \underline{\quad}$  $\underline{\quad} + \underline{\quad} = \underline{\quad}$ $\underline{\quad} + \underline{\quad} = \underline{\quad}$	<p>f.</p> $27 + 13 = \underline{\quad}$  $\underline{\quad} + \underline{\quad} = \underline{\quad}$ $\underline{\quad} + \underline{\quad} = \underline{\quad}$

2. Solve using number bonds. Part (a) has been started for you.

a. $14 + 13 = \underline{\quad}$ $\underline{\quad} + \underline{\quad} = \underline{\quad}$ $\underline{\quad} + \underline{\quad} = \underline{\quad}$	b. $24 + 14 = \underline{\quad}$ $\underline{\quad} + \underline{\quad} = \underline{\quad}$ $\underline{\quad} + \underline{\quad} = \underline{\quad}$
c. $15 + 14 = \underline{\quad}$	d. $24 + 15 = \underline{\quad}$
e. $22 + 17 = \underline{\quad}$	f. $27 + 12 = \underline{\quad}$
g. $18 + 12 = \underline{\quad}$	h. $28 + 12 = \underline{\quad}$

Name _____

Date _____

1. Solve using number bonds. This time, add the tens first. Write the 2 number sentences to show what you did.

a.

$12 + 14 = \underline{\quad}$

b.

$14 + 21 = \underline{\quad}$

c.

$15 + 14 = \underline{\quad}$

d.

$25 + 14 = \underline{\quad}$

e.

$23 + 16 = \underline{\quad}$

f.

$16 + 24 = \underline{\quad}$

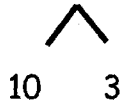
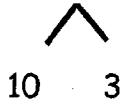
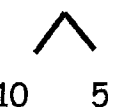
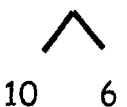
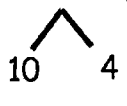
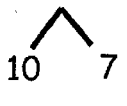
2. Solve using number bonds. This time, add the ones first. Write the 2 number sentences to show what you did.

a. $27 + 10 = \underline{\quad}$	b. $27 + 13 = \underline{\quad}$
c. $13 + 26 = \underline{\quad}$	d. $26 + 14 = \underline{\quad}$
e. $12 + 18 = \underline{\quad}$	f. $18 + 21 = \underline{\quad}$
g. $19 + 11 = \underline{\quad}$	h. $21 + 19 = \underline{\quad}$

Name _____

Date _____

1. Solve using a number bond to add ten first. Write the 2 addition sentences that helped you.

<p>a. $18 + 13 = \underline{\quad}$</p>  <p>$18 + 10 = 28$</p> <p>$28 + 3 = 31$</p>	<p>b. $13 + 19 = \underline{\quad}$</p>  <p>$19 + 10 = 29$</p> <p>$29 + 3 = 32$</p>
<p>c. $17 + 15 = \underline{\quad}$</p>  <p>$17 + 10 = \underline{\quad}$</p> <p>$\underline{\quad} + 5 = \underline{\quad}$</p>	<p>d. $17 + 16 = \underline{\quad}$</p>  <p>$17 + 10 = \underline{\quad}$</p> <p>$\underline{\quad} + 6 = \underline{\quad}$</p>
<p>e. $17 + 14 = \underline{\quad}$</p>  <p>$17 + 10 = \underline{\quad}$</p> <p>$\underline{\quad} + \underline{\quad} = \underline{\quad}$</p>	<p>f. $19 + 17 = \underline{\quad}$</p>  <p>$19 + 10 = \underline{\quad}$</p> <p>$\underline{\quad} + \underline{\quad} = \underline{\quad}$</p>

2. Solve using a number bond to make a ten first. Write the 2 number sentences that helped you.

<p>a.</p> $19 + 13 = \underline{\quad}$ $19 + 1 = 20$ $20 + 12 = 32$	<p>b.</p> $19 + 14 = \underline{\quad}$ $19 + 1 = 20$ $20 + 13 = 33$
<p>c.</p> $18 + 15 = \underline{\quad}$ $18 + 2 = \underline{\quad}$ $20 + 13 = \underline{\quad}$	<p>d.</p> $18 + 17 = \underline{\quad}$ $18 + 2 = \underline{\quad}$ $\underline{\quad} + 15 = \underline{\quad}$
<p>e.</p> $18 + 19 = \underline{\quad}$ $\underline{\quad} + 1 = \underline{\quad}$ $\underline{\quad} + 17 = \underline{\quad}$	<p>f.</p> $19 + 19 = \underline{\quad}$ $\underline{\quad} + \underline{\quad} = \underline{\quad}$ $\underline{\quad} + \underline{\quad} = \underline{\quad}$

Name _____

Date _____

1. Solve using number bonds with pairs of number sentences. You may draw quick tens and some ones to help you.

a. $17 + 14 = \underline{\quad}$	b. $16 + 15 = \underline{\quad}$
c. $17 + 15 = \underline{\quad}$	d. $18 + 13 = \underline{\quad}$
e. $18 + 15 = \underline{\quad}$	f. $18 + 16 = \underline{\quad}$
g. $19 + 15 = \underline{\quad}$	h. $19 + 16 = \underline{\quad}$

2. Solve. You may draw quick tens and some ones to help you.

a. $19 + 14 = \underline{\quad}$	b. $19 + 17 = \underline{\quad}$
c. $18 + 17 = \underline{\quad}$	d. $16 + 16 = \underline{\quad}$
e. $17 + 14 = \underline{\quad}$	f. $15 + 16 = \underline{\quad}$
g. $19 + 19 = \underline{\quad}$	h. $18 + 18 = \underline{\quad}$

Name _____

Date _____

Solve using quick tens and ones, number bonds, or the arrow way.

a. $13 + 16 = \underline{\quad}$	b. $15 + 16 = \underline{\quad}$
c. $16 + 16 = \underline{\quad}$	d. $26 + 12 = \underline{\quad}$
e. $22 + 17 = \underline{\quad}$	f. $17 + 15 = \underline{\quad}$
g. $17 + 16 = \underline{\quad}$	h. $18 + 17 = \underline{\quad}$

i. $24 + 13 = \underline{\quad}$

j. $15 + 24 = \underline{\quad}$

k. $19 + 16 = \underline{\quad}$

l. $14 + 22 = \underline{\quad}$

m. $27 + 12 = \underline{\quad}$

n. $28 + 12 = \underline{\quad}$

o. $18 + 17 = \underline{\quad}$

p. $19 + 18 = \underline{\quad}$

Name _____ Date _____

1. Solve using quick ten drawings, number bonds, or the arrow way.

a. $13 + 15 = \underline{\quad}$	b. $26 + 12 = \underline{\quad}$
c. $23 + 16 = \underline{\quad}$	d. $17 + 16 = \underline{\quad}$
e. $14 + 17 = \underline{\quad}$	f. $27 + 12 = \underline{\quad}$
g. $15 + 18 = \underline{\quad}$	h. $18 + 16 = \underline{\quad}$

2. Solve using quick ten drawings, number bonds, or the arrow way.

a. $17 + 12 = \underline{\quad}$	b. $21 + 17 = \underline{\quad}$
c. $17 + 15 = \underline{\quad}$	d. $27 + 13 = \underline{\quad}$
e. $23 + 14 = \underline{\quad}$	f. $18 + 17 = \underline{\quad}$
g. $18 + 11 = \underline{\quad}$	h. $18 + 18 = \underline{\quad}$