

Name \_\_\_\_\_

Date \_\_\_\_\_

Read the math story. Make a simple math drawing with labels. **Circle** 10 and solve.

1. Chris bought some treats. He bought 5 granola bars, 6 boxes of raisins, and 4 cookies. How many treats did Chris buy?

$$\underline{\quad} + \underline{\quad} + \underline{\quad} = \underline{\quad}$$

$$10 + \underline{\quad} = \underline{\quad}$$

Chris bought \_\_\_\_\_ treats.

- 
2. Cindy has 5 cats, 7 goldfish, and 5 dogs. How many pets does she have in all?

$$\underline{\quad} + \underline{\quad} + \underline{\quad} = \underline{\quad}$$

$$10 + \underline{\quad} = \underline{\quad}$$

Cindy has \_\_\_\_\_ pets.

3. Mary gets stickers at school for good work. She got 7 puffy stickers, 6 smelly stickers, and 3 flat stickers. How many stickers did Mary get at school altogether?

$$\underline{\quad} + \underline{\quad} + \underline{\quad} = \underline{\quad}$$

$$10 + \underline{\quad} = \underline{\quad}$$

Mary got  $\underline{\quad}$  stickers at school.

---

4. Jim sat at a table with 4 teachers and 9 children. How many people were at the table after Jim sat down?

$$\underline{\quad} + \underline{\quad} + \underline{\quad} = \underline{\quad}$$

$$\underline{\quad} + \underline{\quad} = \underline{\quad}$$

There were  $\underline{\quad}$  people at the table after Jim sat down.

Name \_\_\_\_\_

Date \_\_\_\_\_

Circle the numbers that make ten. Draw a picture. Complete the number sentence.


1.  $\textcircled{6} + 2 + \textcircled{4} = \square$



$$\underline{6} + \underline{\quad} + \underline{2}$$

$$\boxed{10} + \underline{\quad} = \underline{\quad}$$

2.  $5 + 3 + 5 = \square$



$$\underline{\quad} + \underline{\quad} + \underline{\quad}$$

$$10 + \underline{\quad} = \underline{\quad}$$


3.  $5 + 2 + 8 = \square$



$$\underline{\quad} + \underline{\quad} + \underline{\quad}$$

$$\underline{\quad} + 10 = \underline{\quad}$$

4.  $2 + 7 + 3 = \square$

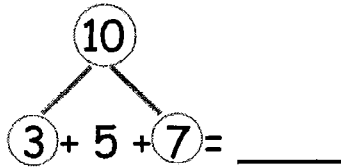


$$\underline{\quad} + \underline{\quad} + \underline{\quad}$$

$$\underline{\quad} + 10 = \underline{\quad}$$

Circle the numbers that make ten, and put them into a number bond. Write a new number sentence.

5.



$$\underline{\quad} + \underline{\quad} = \underline{\quad}$$

6.

$$4 + 8 + 2 = \underline{\quad}$$

$$\underline{\quad} + \underline{\quad} = \underline{\quad}$$

Challenge: Circle the addends that make ten. Circle the true number sentences.

a.  $\boxed{5} + \boxed{5} + 3 = 10 + 3$

c.  $3 + 8 + 7 = 10 + 6$

b.  $4 + 6 + 6 = 10 + 6$

d.  $8 + 9 + 2 = 9 + 10$

Name \_\_\_\_\_

Date \_\_\_\_\_

Draw, label, and **circle** to show how you made ten to help you solve.  
Complete the number sentences.

1. Ron has 9 marbles, and Sue has 4 marbles.  
How many marbles do they have in all?

9 and \_\_\_\_\_ make \_\_\_\_\_.

10 and \_\_\_\_\_ make \_\_\_\_\_.

Ron and Sue have \_\_\_\_\_ marbles.

- 
2. Jim has 5 cars, and Tina has 9. How many cars do they have altogether?

9 and \_\_\_\_\_ make \_\_\_\_\_.

10 and \_\_\_\_\_ make \_\_\_\_\_.

Jim and Tina have \_\_\_\_\_ cars.

3. Stan has 6 fish, and Meg has 9. How many fish do they have in all?

$$9 + \underline{\quad} = \underline{\quad}$$

$$10 + \underline{\quad} = \underline{\quad}$$

Stan and Meg have      fish.

---

4. Rick made 7 cookies, and Mom made 9. How many cookies did Rick and Mom make?

$$9 + \underline{\quad} = \underline{\quad}$$

$$10 + \underline{\quad} = \underline{\quad}$$

Rick and Mom made      cookies.

---

5. Dad has 8 pens, and Tony has 9. How many pens do Dad and Tony have in all?

$$9 + \underline{\quad} = \underline{\quad}$$

$$10 + \underline{\quad} = \underline{\quad}$$

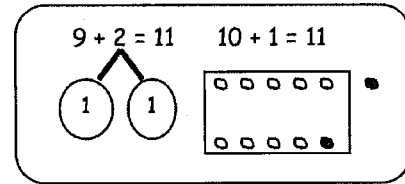
Dad and Tony have      pens.

---


Name \_\_\_\_\_

Date \_\_\_\_\_


Solve. Make math drawings using the ten-frame to show how you made 10 to solve.



1.  $9 + 3 = \underline{\quad}$




\_\_\_\_\_ + \_\_\_\_\_ = \_\_\_\_\_



2.  $9 + 6 = \underline{\quad}$




\_\_\_\_\_ + \_\_\_\_\_ = \_\_\_\_\_



3.  $7 + 9 = \underline{\quad}$

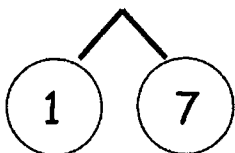


\_\_\_\_\_ + \_\_\_\_\_ = \_\_\_\_\_

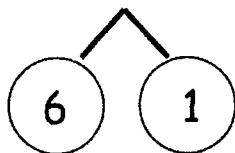


4. Match the number sentences to the bonds you used to help you make ten.

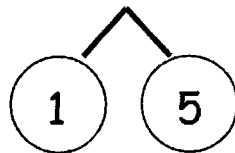
a.  $9 + 8 = \underline{\quad}$



b.  $\underline{\quad} = 9 + 6$



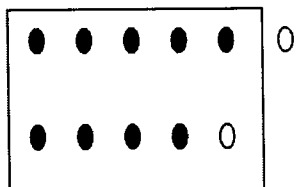
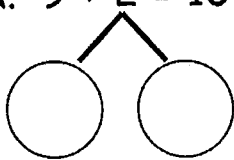
c.  $7 + 9 = \underline{\quad}$




5. Show how the expressions are equal.

Use numbers bonds to make ten in the 9+ fact expression within the true number sentence. Draw to show the total.



a.  $9 + 2 = 10 + 1$



b.  $10 + 3 = 9 + 4$



c.  $5 + 10 = 6 + 9$





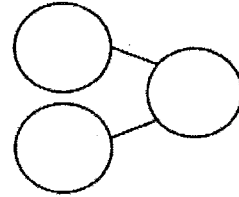
Name \_\_\_\_\_

Date \_\_\_\_\_

Solve the number sentences. Use number bonds to show your thinking. Write the 10+ fact and new number bond.

1.  $9 + 6 = \underline{\quad}$

$10 + \underline{\quad} = \underline{\quad}$



2.  $9 + 8 = \underline{\quad}$

$\underline{\quad} + \underline{\quad} = \underline{\quad}$

3.  $5 + 9 = \underline{\quad}$

$\underline{\quad} + \underline{\quad} = \underline{\quad}$

4.  $7 + 9 = \underline{\quad}$

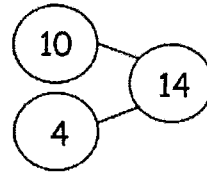
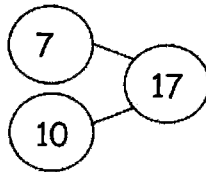
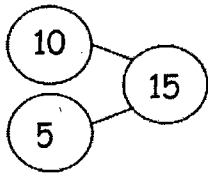
$\underline{\quad} + \underline{\quad} = \underline{\quad}$

5. Solve. Match the number sentence to the 10+ number bond.

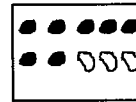
a.  $9 + 5 = \underline{\quad}$

b.  $9 + 6 = \underline{\quad}$

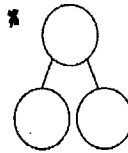
c.  $9 + 8 = \underline{\quad}$



Use an efficient strategy to solve the number sentences.



\*\*\*\*



6.  $9 + 7 = \underline{\quad}$

7.  $9 + 2 = \underline{\quad}$

8.  $9 + 1 = \underline{\quad}$

9.  $8 + 9 = \underline{\quad}$

10.  $4 + 9 = \underline{\quad}$

11.  $9 + 9 = \underline{\quad}$

Name \_\_\_\_\_

Date \_\_\_\_\_

1. Solve. Use your number bonds. Draw a line to match the related facts. Write the related 10+ fact.

a.

$9 + 6 = \underline{\quad}$

$\underline{\quad} = 9 + 8$

b.

$\underline{\quad} = 3 + 9$

$\underline{\quad} = 7 + 9$

c.

$\underline{\quad} = 9 + 5$

$6 + 9 = \underline{\quad}$

$10 + 5 = 15$

d.

$8 + 9 = \underline{\quad}$

$9 + 3 = \underline{\quad}$

e.

$9 + 7 = \underline{\quad}$

$5 + 9 = \underline{\quad}$

2. Complete the addition sentences to make them true.

a.  $3 + 10 = \underline{\quad}$

f.  $\underline{\quad} = 7 + 9$

b.  $4 + 9 = \underline{\quad}$

g.  $10 + \underline{\quad} = 18$

c.  $10 + 5 = \underline{\quad}$

h.  $9 + 8 = \underline{\quad}$

d.  $9 + 6 = \underline{\quad}$

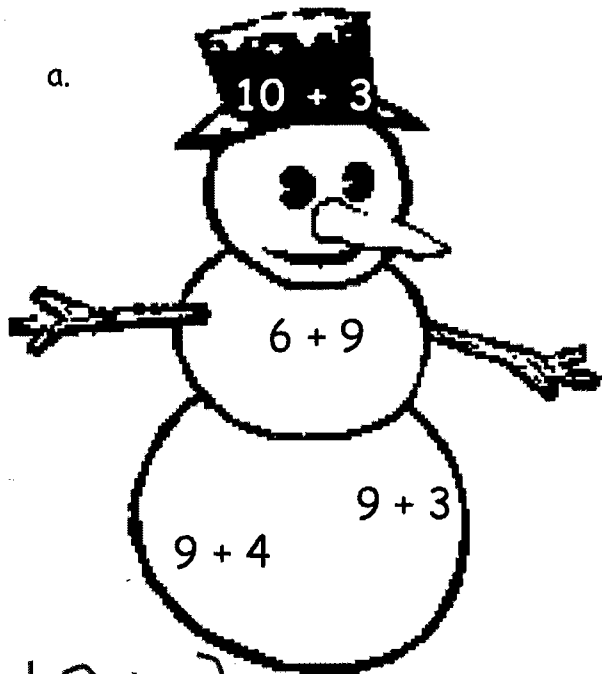
i.  $\underline{\quad} + 9 = 19$

e.  $7 + 10 = \underline{\quad}$

j.  $5 + 9 = \underline{\quad}$

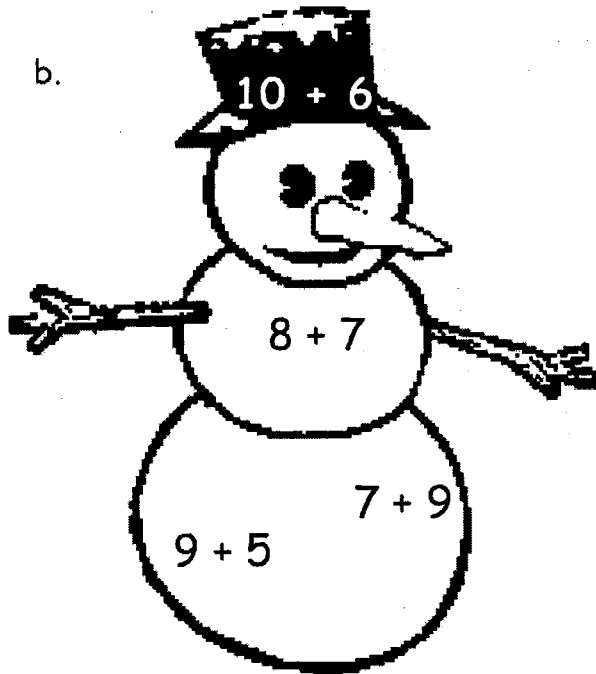
3. Find and color the expression that is equal to the expression on the snowman's hat.  
Write the true number sentence below.

a.



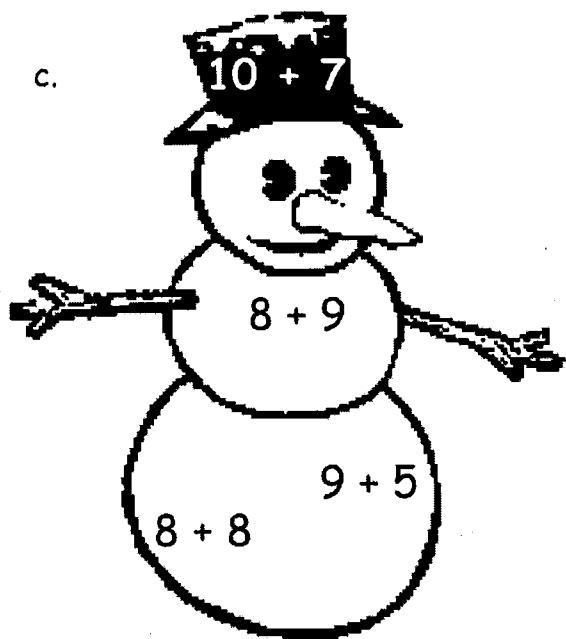
$$10 + 3 = \underline{\hspace{2cm}}$$

b.




=

c.



=

d.

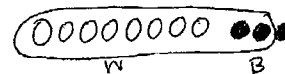


=

Name \_\_\_\_\_

Date \_\_\_\_\_

Draw, label, and **circle** to show how you made ten to help you solve.



Write the number sentences you used to solve.

1. Meg gets 8 toy animals and 4 toy cars at a party.  
How many toys does Meg get in all?

$$8 + 3 = 11$$

$$10 + 1 = 11$$

$$8 + 4 = \underline{\quad}$$

$$10 + \underline{\quad} = \underline{\quad}$$

Meg gets          toys.

2. John makes 6 baskets in his first basketball game and 8 baskets in his second.  
How many baskets does he make altogether?

$$\underline{\quad} + \underline{\quad} = \underline{\quad}$$

$$\underline{\quad} + \underline{\quad} = \underline{\quad}$$

John makes          baskets.

3. May has a party. She invites 7 girls and 8 boys. How many friends does she invite in all?

$$\underline{\quad\quad} + \underline{\quad\quad} = \underline{\quad\quad}$$

$$\underline{\quad\quad} + \underline{\quad\quad} = \underline{\quad\quad}$$

May invites  $\underline{\quad\quad}$  friends.

4. Alec collects baseball hats. He has 9 Mets hats and 8 Yankees hats. How many hats are in his collection?

$$\underline{\quad\quad} + \underline{\quad\quad} = \underline{\quad\quad}$$

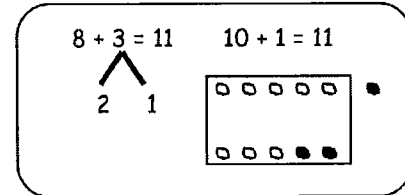
$$\underline{\quad\quad} + \underline{\quad\quad} = \underline{\quad\quad}$$

Alec has  $\underline{\quad\quad}$  hats.

Name \_\_\_\_\_


Date \_\_\_\_\_

Solve. Make math drawings using the ten-frame to show how you made ten to solve.




1.  $8 + 4 = \underline{\quad}$

$\underline{\quad} + \underline{\quad} = \underline{\quad}$




2.  $8 + 6 = \underline{\quad}$

$\underline{\quad} + \underline{\quad} = \underline{\quad}$



3.  $7 + 8 = \underline{\quad}$


$\underline{\quad} + \underline{\quad} = \underline{\quad}$




4. Make math drawings using ten-frames to solve. **Circle** the true number sentences.

Write an X to show number sentences that are not true.


a.  $8 + 4 = 10 + 2$




b.  $10 + 6 = 8 + 8$




c.  $7 + 8 = 10 + 6$




d.  $5 + 10 = 5 + 8$



e.  $2 + 10 = 8 + 3$



f.  $8 + 9 = 10 + 7$





Name \_\_\_\_\_ Date \_\_\_\_\_

Use number bonds to show your thinking. Write the 10+ fact.

1.  $8 + 3 = \underline{\quad}$

$10 + \underline{\quad} = \underline{\quad}$

2.  $6 + 8 = \underline{\quad}$

$\underline{\quad} + 10 = \underline{\quad}$

3.  $\underline{\quad} = 8 + 8$

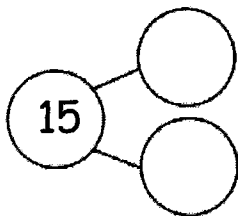
$\underline{\quad} = 10 + \underline{\quad}$

4.  $\underline{\quad} = 5 + 8$

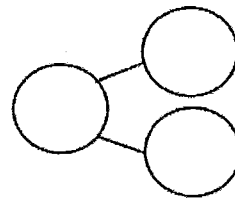
$\underline{\quad} = 10 + \underline{\quad}$

Complete the addition sentences and the number bonds.

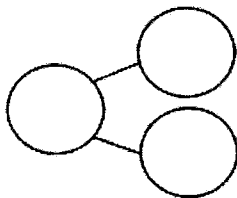
5. a.  $7 + 8 = \underline{\quad}$



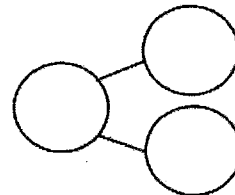
b.  $10 + 5 = \underline{\quad}$



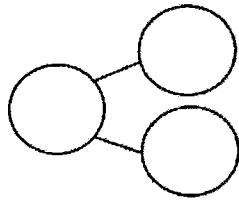
6. a.  $16 = \underline{\quad} + 8$



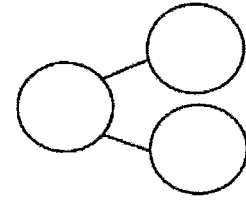
b.  $10 + 6 = \underline{\quad}$



7. a.  $\underline{\quad} = 9 + 8$



b.  $10 + 7 = \underline{\quad}$



Draw a line to the matching number sentence. You may use a number bond or 5-group drawing to help you.

8.  $11 = 8 + 3$

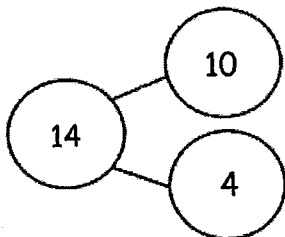
$$8 + 6 = 14$$

9. Lisa had 5 red rocks and 8 white rocks.  
How many rocks did she have?

$$10 + 1 = 11$$

$$13 = 10 + 3$$

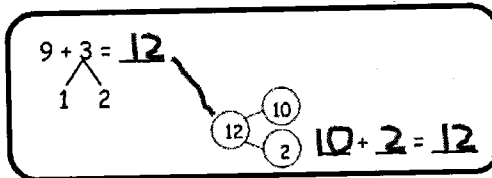
10.



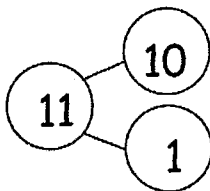
Name \_\_\_\_\_

Date \_\_\_\_\_

Solve. Match the number sentence to the ten-plus number bond that helped you solve the problem. Write the ten-plus number sentence.

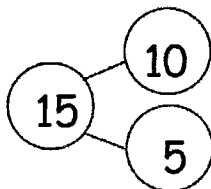


1.  $8 + 6 = \underline{\quad}$



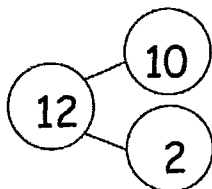
$\underline{\quad} + \underline{\quad} = \underline{\quad}$

2.  $7 + 5 = \underline{\quad}$



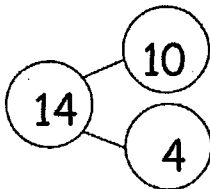
$\underline{\quad} + \underline{\quad} = \underline{\quad}$

3.  $5 + 8 = \underline{\quad}$



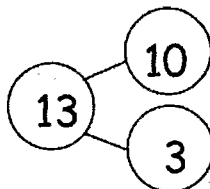
$\underline{\quad} + \underline{\quad} = \underline{\quad}$

4.  $4 + 7 = \underline{\quad}$



$\underline{\quad} + \underline{\quad} = \underline{\quad}$

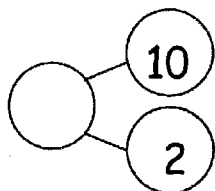
5.  $6 + 9 = \underline{\quad}$



$\underline{\quad} + \underline{\quad} = \underline{\quad}$

Complete the number sentences so they equal the given number bond.

6.

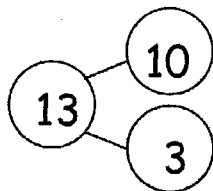


$$9 + \underline{\quad} = 12$$

$$8 + \underline{\quad} = 12$$

$$7 + \underline{\quad} = 12$$

7.

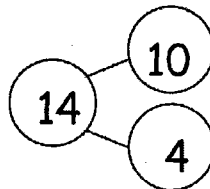


$$9 + \underline{\quad} = 13$$

$$8 + \underline{\quad} = 13$$

$$7 + \underline{\quad} = 13$$

8.

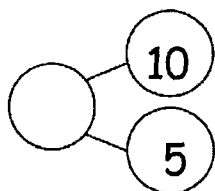


$$9 + \underline{\quad} = 14$$

$$8 + \underline{\quad} = 14$$

$$7 + \underline{\quad} = 14$$

9.

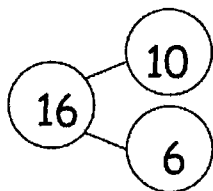


$$15 = 9 + \underline{\quad}$$

$$\underline{\quad} = 8 + \underline{\quad}$$

$$\underline{\quad} = 7 + \underline{\quad}$$

10.

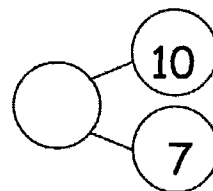


$$16 = 9 + \underline{\quad}$$

$$\underline{\quad} = 8 + \underline{\quad}$$

$$7 + \underline{\quad} = \underline{\quad}$$

11.



$$\underline{\quad} = 9 + 8$$

$$\underline{\quad} = 8 + \underline{\quad}$$

$$\underline{\quad} = 7 + \underline{\quad}$$